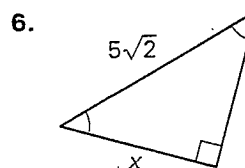
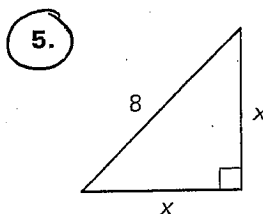
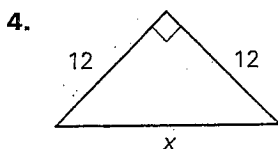
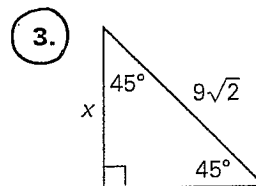
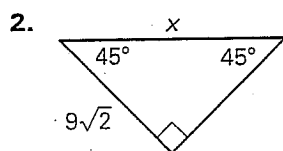
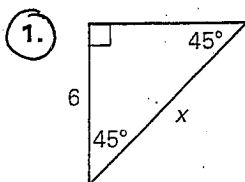


LESSON
7.4**Practice B**
For use with pages 457-464

AND p. 447 # 1-9 ODD

Find the value of x . Write your answer in simplest radical form.

Find the value of each variable. Write your answers in simplest radical form.

